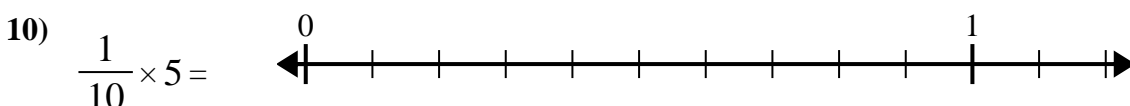
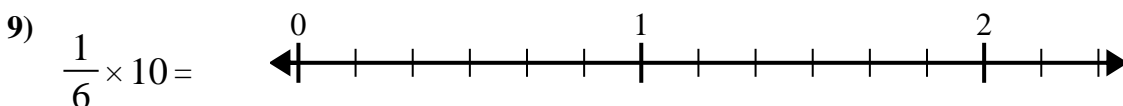
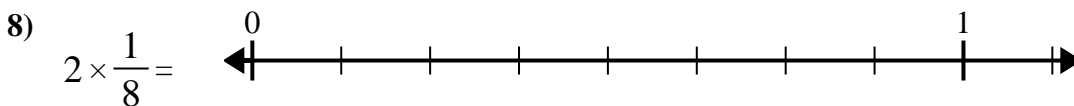
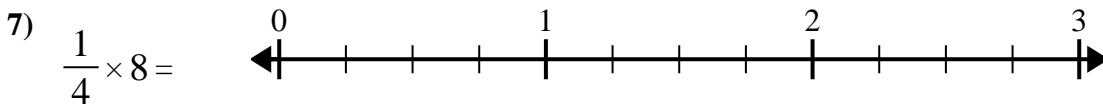
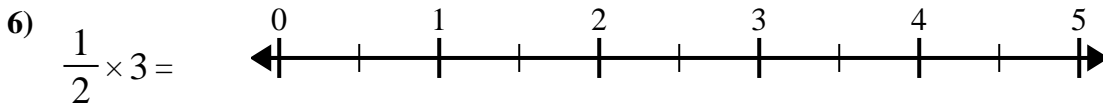
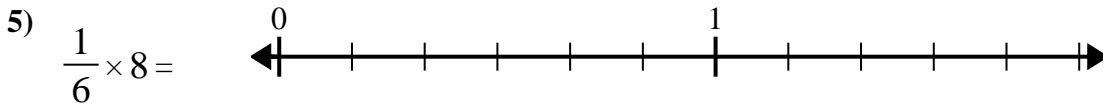
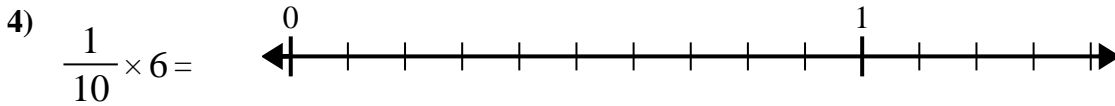
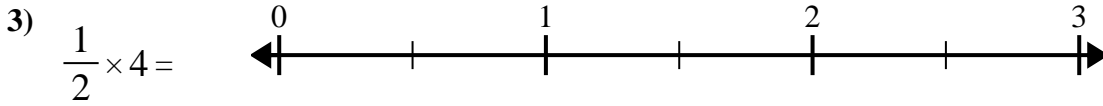
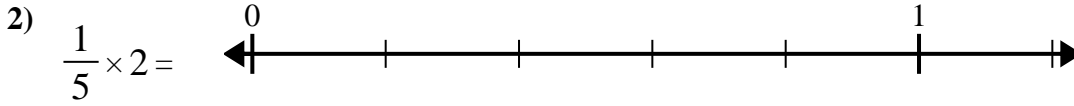
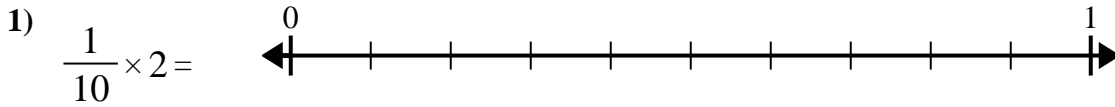




Use the numberline to solve.



Answers

1. _____

2. _____

3. _____

4. _____

5. _____

6. _____

7. _____

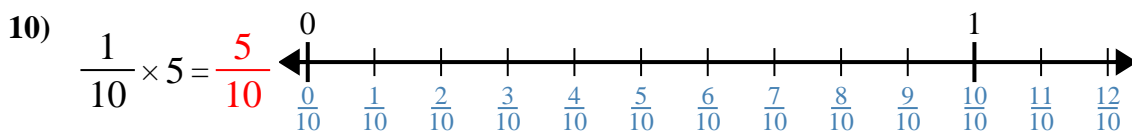
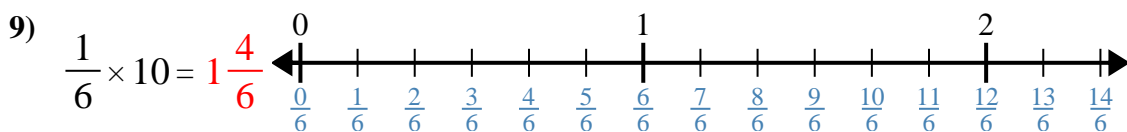
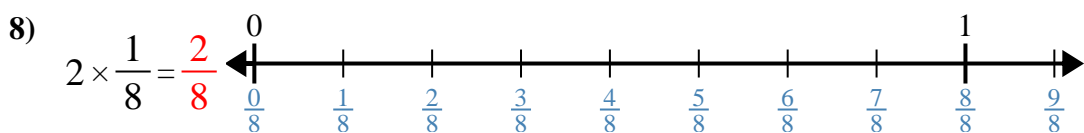
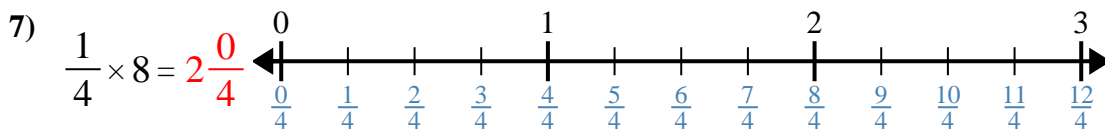
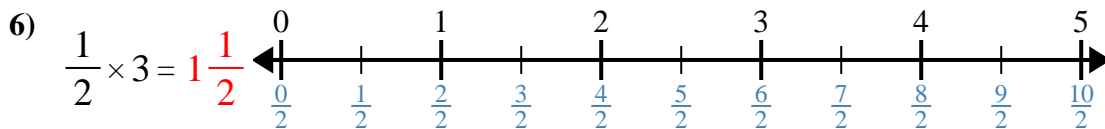
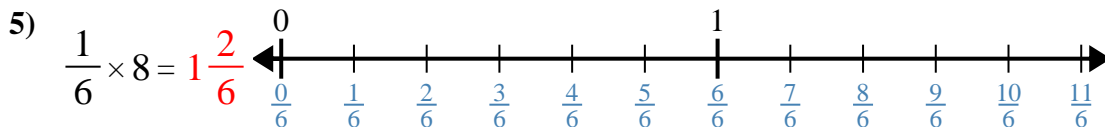
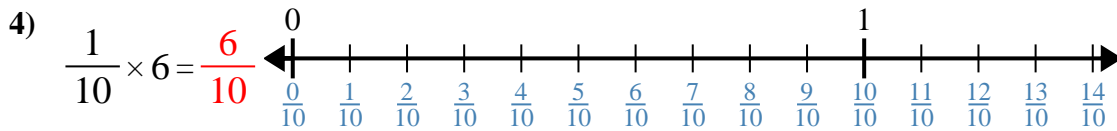
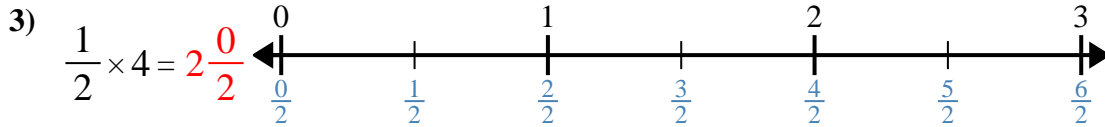
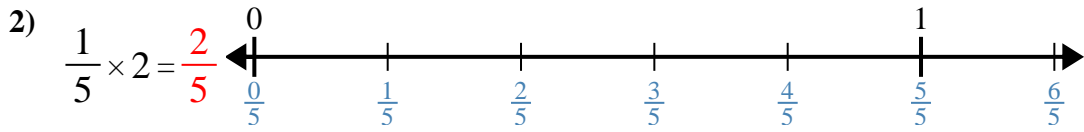
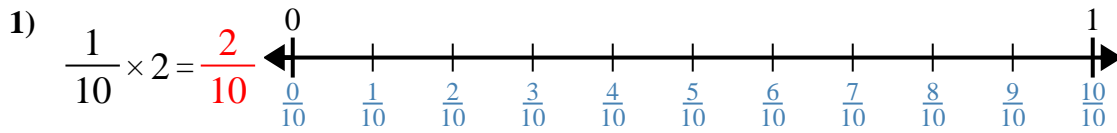
8. _____

9. _____

10. _____



Use the numberline to solve.



Answers

1. $\frac{2}{10}$

2. $\frac{2}{5}$

3. $2\frac{0}{2}$

4. $\frac{6}{10}$

5. $1\frac{2}{6}$

6. $1\frac{1}{2}$

7. $2\frac{0}{4}$

8. $\frac{2}{8}$

9. $1\frac{4}{6}$

10. $\frac{5}{10}$



Use the numberline to solve.

$1\frac{1}{2}$

$\frac{2}{8}$

$2\frac{0}{4}$

$\frac{2}{5}$

$1\frac{4}{6}$

$\frac{2}{10}$

$2\frac{0}{2}$

$\frac{5}{10}$

$\frac{6}{10}$

$1\frac{2}{6}$

Answers

1)

1. _____

2)

2. _____

3)

3. _____

4)

4. _____

5)

5. _____

6)

6. _____

7)

7. _____

8)

8. _____

9)

9. _____

10)

10. _____